



3 الحَصِيلَةُ

1 و2. أَحْسِبِ الْمُدَّةَ الزَّمَنِيَّةَ بَيْنَ السَّاعَتَيْنِ (1) وَ (2).



(2)



(1)

دَقِيقَةٌ

1 قِسْ طُولَ الْخَطِّ الْمُنْكَسِرِ:



أَكْمِلِ الْحِسَابَ وَالْإِجَابَةَ

$$..... + + =$$

طُولَ الْخَطِّ الْمُنْكَسِرِ هُوَ : سَنْتِيمِتر.

أَحْسِبْ

$$100 + 80 =$$

$$80 + 100 =$$

$$100 + 20 + 9 =$$

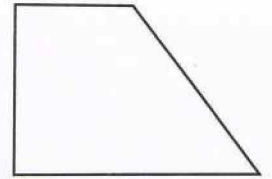

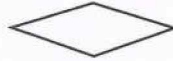


2 عَدِّ 10-10 تَنَازُلِيًّا:

$$256 \dots \dots \dots \dots \dots$$

$$\dots \dots \dots \dots \dots$$

$$\dots \dots \dots \dots \dots$$

3 عَلِّمْ بِمُرَبَّعٍ أَحْمَرَ الزُّوَايَا الْقَائِمَةَ عَلَى كُلِّ مِنَ الْأَشْكَالِ:



4 أَحْسِبْ عُمُودِيًّا:

$$\begin{array}{r} 121 \\ + 13 \\ + 44 \\ \hline = \dots \end{array}$$

$$\begin{array}{r} 200 \\ + 40 \\ + 30 \\ \hline = \dots \end{array}$$

$$\begin{array}{r} 21 \\ + 43 \\ + 75 \\ \hline = \dots \end{array}$$

5 تُوجَدُ الضَّفْدَعَةُ عَلَى الْخَانَةِ 78 ، ثُمَّ تَقَدَّمَتْ وَأَصْبَحَتْ عَلَى الْخَانَةِ 98

بِكَمْ خَانَةٍ تَقَدَّمَتْ الضَّفْدَعَةُ؟

الْعَمَلِيَّةُ:

الإِجَابَةُ: تَقَدَّمَتْ الضَّفْدَعَةُ خَانَةً

